

$$\begin{aligned}
 Q &= \frac{rV}{k} \\
 &= \frac{(0.125 \text{ m})(100 \times 10^3 \text{ V})}{8.99 \times 10^9 \text{ N}\cdot\text{m}^2/\text{C}^2} \\
 &= 1.39 \times 10^{-6} \text{ C} = 1.39 \text{ }\mu\text{C}.
 \end{aligned}
 \tag{19.42}$$

### Discussion

This is a relatively small charge, but it produces a rather large voltage. We have another indication here that it is difficult to store isolated charges.

The voltages in both of these examples could be measured with a meter that compares the measured potential with ground potential. Ground potential is often taken to be zero (instead of taking the potential at infinity to be zero). It is the potential difference between two points that is of importance, and very often there is a tacit assumption that some reference point, such as Earth or a very distant point, is at zero potential. As noted in [Electric Potential Energy: Potential Difference](#), this is analogous to taking sea level as  $h = 0$  when considering gravitational potential energy,  $\text{PE}_g = mgh$ .

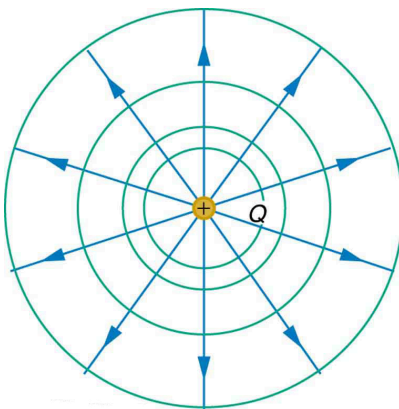
## 19.4 Equipotential Lines

### LEARNING OBJECTIVES

By the end of this section, you will be able to:

- Explain equipotential lines and equipotential surfaces.
- Describe the action of grounding an electrical appliance.
- Compare electric field and equipotential lines.

We can represent electric potentials (voltages) pictorially, just as we drew pictures to illustrate electric fields. Of course, the two are related. Consider [Figure 19.8](#), which shows an isolated positive point charge and its electric field lines. Electric field lines radiate out from a positive charge and terminate on negative charges. While we use blue arrows to represent the magnitude and direction of the electric field, we use green lines to represent places where the electric potential is constant. These are called **equipotential lines** in two dimensions, or *equipotential surfaces* in three dimensions. The term *equipotential* is also used as a noun, referring to an equipotential line or surface. The potential for a point charge is the same anywhere on an imaginary sphere of radius  $r$  surrounding the charge. This is true since the potential for a point charge is given by  $V = kQ/r$  and, thus, has the same value at any point that is a given distance  $r$  from the charge. An equipotential sphere is a circle in the two-dimensional view of [Figure 19.8](#). Since the electric field lines point radially away from the charge, they are perpendicular to the equipotential lines.



**FIGURE 19.8** An isolated point charge  $Q$  with its electric field lines in blue and equipotential lines in green. The potential is the same along each equipotential line, meaning that no work is required to move a charge anywhere along one of those lines. Work is needed to move a charge from one equipotential line to another. Equipotential lines are perpendicular to electric field lines in every case.

It is important to note that *equipotential lines are always perpendicular to electric field lines*. No work is required to move a charge along an equipotential, since  $\Delta V = 0$ . Thus the work is

$$W = -\Delta PE = -q\Delta V = 0. \quad 19.43$$

Work is zero if force is perpendicular to motion. Force is in the same direction as  $\mathbf{E}$ , so that motion along an equipotential must be perpendicular to  $\mathbf{E}$ . More precisely, work is related to the electric field by

$$W = Fd \cos \theta = qEd \cos \theta = 0. \quad 19.44$$

Note that in the above equation,  $E$  and  $F$  symbolize the magnitudes of the electric field strength and force, respectively. Neither  $q$  nor  $\mathbf{E}$  nor  $d$  is zero, and so  $\cos \theta$  must be 0, meaning  $\theta$  must be  $90^\circ$ . In other words, motion along an equipotential is perpendicular to  $\mathbf{E}$ .

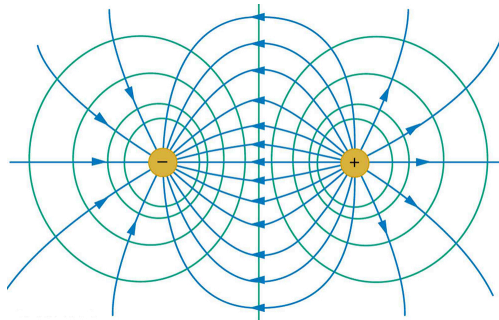
One of the rules for static electric fields and conductors is that the electric field must be perpendicular to the surface of any conductor. This implies that a *conductor is an equipotential surface in static situations*. There can be no voltage difference across the surface of a conductor, or charges will flow. One of the uses of this fact is that a conductor can be fixed at zero volts by connecting it to the earth with a good conductor—a process called **grounding**. Grounding can be a useful safety tool. For example, grounding the metal case of an electrical appliance ensures that it is at zero volts relative to the earth.

### Grounding

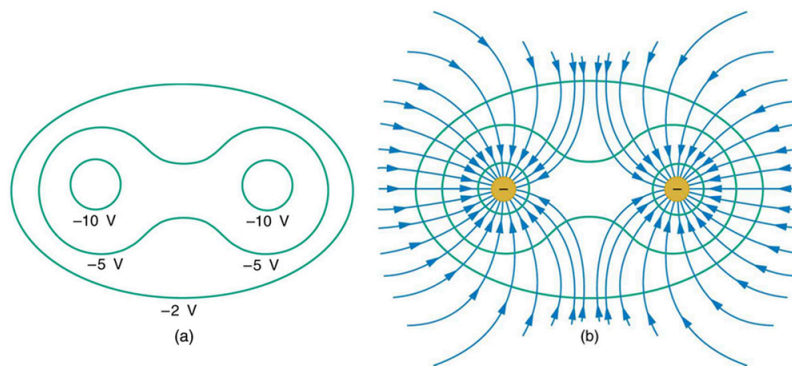
A conductor can be fixed at zero volts by connecting it to the earth with a good conductor—a process called grounding.

Because a conductor is an equipotential, it can replace any equipotential surface. For example, in [Figure 19.8](#) a charged spherical conductor can replace the point charge, and the electric field and potential surfaces outside of it will be unchanged, confirming the contention that a spherical charge distribution is equivalent to a point charge at its center.

[Figure 19.9](#) shows the electric field and equipotential lines for two equal and opposite charges. Given the electric field lines, the equipotential lines can be drawn simply by making them perpendicular to the electric field lines. Conversely, given the equipotential lines, as in [Figure 19.10\(a\)](#), the electric field lines can be drawn by making them perpendicular to the equipotentials, as in [Figure 19.10\(b\)](#).

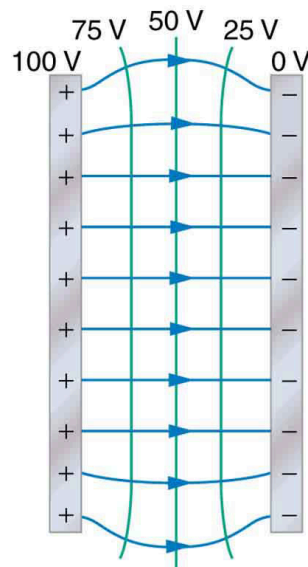


**FIGURE 19.9** The electric field lines and equipotential lines for two equal but opposite charges. The equipotential lines can be drawn by making them perpendicular to the electric field lines, if those are known. Note that the potential is greatest (most positive) near the positive charge and least (most negative) near the negative charge.



**FIGURE 19.10** (a) These equipotential lines might be measured with a voltmeter in a laboratory experiment. (b) The corresponding electric field lines are found by drawing them perpendicular to the equipotentials. Note that these fields are consistent with two equal negative charges.

One of the most important cases is that of the familiar parallel conducting plates shown in [Figure 19.11](#). Between the plates, the equipotentials are evenly spaced and parallel. The same field could be maintained by placing conducting plates at the equipotential lines at the potentials shown.



**FIGURE 19.11** The electric field and equipotential lines between two metal plates.

An important application of electric fields and equipotential lines involves the heart. The heart relies on electrical signals to maintain its rhythm. The movement of electrical signals causes the chambers of the heart to contract and relax. When a person has a heart attack, the movement of these electrical signals may be disturbed. An artificial pacemaker and a defibrillator can be used to initiate the rhythm of electrical signals. The equipotential lines around the heart, the thoracic region, and the axis of the heart are useful ways of monitoring the structure and functions of the heart. An electrocardiogram (ECG) measures the small electric signals being generated during the activity of the heart. More about the relationship between electric fields and the heart is discussed in [Energy Stored in Capacitors](#).



## PHET EXPLORATIONS

### Charges and Fields

Move point charges around on the playing field and then view the electric field, voltages, equipotential lines, and more. It's colorful, it's dynamic, it's free.

[Click to view content \(https://openstax.org/books/college-physics-2e/pages/19-4-equipotential-lines\)](https://openstax.org/books/college-physics-2e/pages/19-4-equipotential-lines)